

Name: _____ Date: _____


Find the time

Tell and write the time to quarter of an hour




You will need:


- timer




half past 4




quarter to 7




quarter past 5




quarter to 10




quarter to 8




quarter past 6




quarter past 11




half past 12




quarter to 1



quarter past 9



quarter past 8



quarter to 4

What to do

- Ask your child to draw a line from the time to each matching clock. They then ✓ tick the clocks that show quarter past and put a cross X next to the clocks that show quarter to.



Ask your child to focus on an activity with you for 15 minutes, for example, reading a book or playing a game. Show your child how to set the timer on your watch, phone or kitchen timer for 15 minutes. Help your child to write or draw the start and finish times on the back of this sheet, and to write what you did.